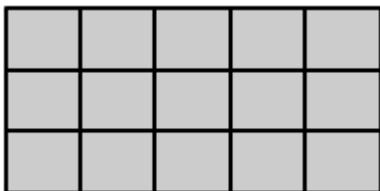


1. Find how many squares make the rectangle.


[Need a Hint?](#)



- A. 16 squares
B. 20 squares
C. 30 squares
D. 15 squares
-

2. Find how many squares make the rectangle.

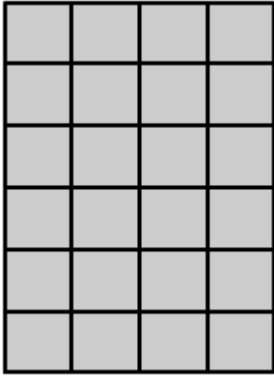
[Need a Hint?](#)



- A. 16 squares
B. 20 squares
C. 25 squares
D. 36 squares
-

3. Find how many squares make the rectangle.


[Need a Hint?](#)



- A. 22 squares
B. 24 squares
C. 28 squares
D. 32 squares
-

4. Find how many squares make the rectangle.

[Need a Hint?](#)



- A. 6 squares
B. 4 squares
C. 8 squares
D. 10 squares
-

5. Find how many squares make the rectangle.

[Need a Hint?](#)



- A. 6 squares
B. 5 squares
C. 7 squares
D. 8 squares
-