





Name: _____

1. Partition the shapes into 2 equal shares.

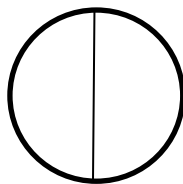


2. Partition the shapes into 4 equal shares.

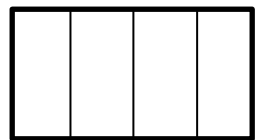


3. Describe the shapes as partitioned into **halves** or **fourths**. Circle the correct answer.

halves fourths




halves fourths




halves fourths




halves fourths



halves fourths




halves fourths



4. Another word for fourths is _____.

5. Alejandro wants to cut the pizza into equal shares and give his sister a quarter of the pizza to eat. Partition the pizza into quarters and color the part of pizza that Alejandro would give his sister.

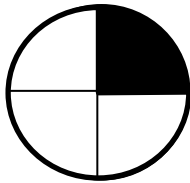


6. Sara wants to give half of her chocolate bar to her friend. Partition the chocolate bar into halves and color the part of the chocolate bar that Sara would give her friend.

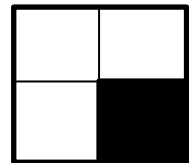


7. Circle the word that best describes the black part of the shape.

1 out of 4 equal parts



one fourth



1 out of 2 equal parts

one half

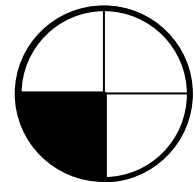
a half



a quarter

1 out of 4 equal parts

a half



2 out of 2 equal parts



1 out of 2 equal parts

2 out of 4 equal parts

1 out of 4 equal parts

